



Subtraktion 1 - mit Zehnern rechnen

Trage die Lösungen ein. Vergleiche die Differenzen.


$36 - 20 = \underline{\quad}$




$46 - 20 = \underline{\quad}$




$56 - 20 = \underline{\quad}$




$25 - 10 = \underline{\quad}$




$45 - 10 = \underline{\quad}$




$56 - 20 = \underline{\quad}$



$54 - 20 = \underline{\quad}$




$74 - 20 = \underline{\quad}$




$94 - 20 = \underline{\quad}$




$45 - 30 = \underline{\quad}$




$46 - 30 = \underline{\quad}$




$47 - 30 = \underline{\quad}$



$63 - 50 = \underline{\quad}$



$66 - 50 = \underline{\quad}$



$69 - 50 = \underline{\quad}$

