


Subtraktion 2 - mit Einern rechnen

Trage die Lösungen ein. Vergleiche die Differenzen.


$17 - 4 = \underline{\quad}$



$37 - 4 = \underline{\quad}$




$57 - 4 = \underline{\quad}$




$18 - 4 = \underline{\quad}$



$48 - 4 = \underline{\quad}$




$78 - 4 = \underline{\quad}$




$16 - 3 = \underline{\quad}$



$56 - 3 = \underline{\quad}$




$56 - 3 = \underline{\quad}$




$19 - 5 = \underline{\quad}$



$39 - 5 = \underline{\quad}$




$59 - 5 = \underline{\quad}$



$16 - 3 = \underline{\quad}$



$56 - 3 = \underline{\quad}$



$96 - 3 = \underline{\quad}$

